


# Add equal groups



1 Complete the sentences below.

a




There are \_\_\_\_\_ equal groups with \_\_\_\_\_ in each group.

There are \_\_\_\_\_ 2s.

$$\underline{\quad\quad} + \underline{\quad\quad} = 4$$

b



There are \_\_\_\_\_ equal groups with \_\_\_\_\_ in each group.

There are \_\_\_\_\_ 4s.

$$\underline{\quad\quad} + \underline{\quad\quad} + \underline{\quad\quad} = 12$$

c




There are \_\_\_\_\_ equal groups with \_\_\_\_\_ in each group.

There are \_\_\_\_\_ 3s.

$$\underline{\quad\quad} + \underline{\quad\quad} + \underline{\quad\quad} = 9$$

d



There are \_\_\_\_\_ equal groups with \_\_\_\_\_ in each group.


There are \_\_\_\_\_ 5s.

$$\underline{\quad\quad} + \underline{\quad\quad} = 10$$


# Add equal groups




1 Match the picture to the correct number sentences.




$$3 + 3 + 3$$



$$2 + 2 + 2$$






$$5 + 5 + 5$$



$$4 + 4$$

2 Jack says the picture below shows  $3 + 2$ .



Is Jack correct? Explain how you know.

---

---

# Add equal groups



1 Complete the sentences below.

a




There are \_\_\_\_\_ equal groups with \_\_\_\_\_ in each group.

There are \_\_\_\_\_ 4s.

$$\underline{\hspace{2cm}} + \underline{\hspace{2cm}} = 8$$

b




There are \_\_\_\_\_ equal groups with \_\_\_\_\_ in each group.

There are \_\_\_\_\_ 3s.

$$\underline{\hspace{2cm}} + \underline{\hspace{2cm}} + \underline{\hspace{2cm}} = 9$$

2 Complete the sentences below.

a




There are \_\_\_\_\_ equal groups with \_\_\_\_\_ in each group.

There are two \_\_\_\_\_s.

$$\underline{\hspace{2cm}} + \underline{\hspace{2cm}} = 20$$

b



There are \_\_\_\_\_ equal groups with \_\_\_\_\_ in each group.


There are three \_\_\_\_\_s.

$$\underline{\hspace{2cm}} + \underline{\hspace{2cm}} + \underline{\hspace{2cm}} = 15$$


# Add equal groups




1 Match the picture to the correct number sentences.




$$3 + 3 + 3$$



$$4 + 4 + 4$$






$$6 + 6 + 6$$



$$5 + 5 + 5$$

2 Jack says the picture below shows  $3 + 3$ .



Is Jack correct? Explain how you know.

---

---

# Add equal groups



1 Complete the sentences below.

a



There are \_\_\_\_\_ equal groups with \_\_\_\_\_ in each group.

There are \_\_\_\_\_ 5s.

$$\underline{\hspace{2cm}} + \underline{\hspace{2cm}} = 10$$

b




There are \_\_\_\_\_ equal groups with \_\_\_\_\_ in each group.

There are three \_\_\_\_\_s.

$$\underline{\hspace{2cm}} + \underline{\hspace{2cm}} + \underline{\hspace{2cm}} = 18$$

c




There are \_\_\_\_\_ equal groups with \_\_\_\_\_ in each group.

There are two \_\_\_\_\_s.

$$\underline{\hspace{2cm}} + \underline{\hspace{2cm}} = 24$$

2 Jack says the picture below shows  $3 + 3 + 3 + 3 + 3$ .



Is Jack correct? Explain how you know.

---

---

# Add equal groups



1 True or false? Explain your answer. You may use equipment to help you.

a  $5 + 5 = 2 + 2 + 2 + 2 + 2$

---

---

b  $3 + 3 + 3 + 3 = 4 + 4 + 4$

---

---

c  $6 + 6 = 3 + 3 + 3$

---

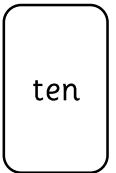

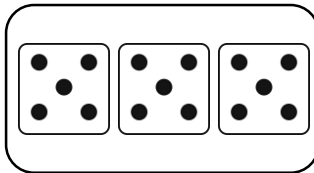
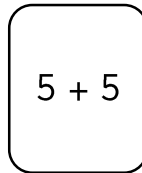
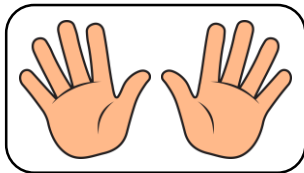
---

d  $3 + 3 = 2 + 2 + 2$

---

---

2 Colour the odd one out.



What would need to be changed to make them all represent the same?

---

---