


# Make equal groups



1 Tick (✓) the sentence that describes the groups below.


a



a) There are 3 equal groups with 2 in each group.

b) There are 2 equal groups with 3 in each group.


b



a) There are 5 equal groups with 2 in each group.

b) There are 2 equal groups with 5 in each group.


c



a) There are 4 equal groups with 3 in each group.

b) There are 3 equal groups with 4 in each group.

d



a) There are 2 equal groups with 3 in each group.

b) There are 3 equal groups with 2 in each group.

# Make equal groups



1 The groups below are equal. Tick (✓) true or false.

a

		True	<input type="checkbox"/>
		False	<input type="checkbox"/>

b

		True	<input type="checkbox"/>
		False	<input type="checkbox"/>

c

		True	<input type="checkbox"/>
		False	<input type="checkbox"/>

2 Put the counters into two equal groups.

a

<input type="text"/>	<input type="text"/>	How many counters in each group? _____
----------------------	----------------------	---

b


<input type="text"/>	<input type="text"/>	How many counters in each group? _____
----------------------	----------------------	---

# Make equal groups



1 Tick (✓) the sentence that describes the groups below.


a



a) There are 2 equal groups with 10 in each group.

b) There are 10 equal groups with 2 in each group.

b



a) There are 5 equal groups with 3 in each group.

b) There are 3 equal groups with 5 in each group.


c



a) There are 6 equal groups with 2 in each group.

b) There are 2 equal groups with 6 in each group.

d



a) There are 3 equal groups with 3 in each group.

b) There are 3 equal groups with 2 in each group.

# Make equal groups



1 The groups below are equal. Tick (✓) true or false.

a

			True <input type="checkbox"/>
			False <input type="checkbox"/>

b

			True <input type="checkbox"/>
			False <input type="checkbox"/>

2 Put the counters into three equal groups.

a

<input type="text"/>	<input type="text"/>	<input type="text"/>	How many counters in each group? _____
----------------------	----------------------	----------------------	---

b

<input type="text"/>	<input type="text"/>	<input type="text"/>	How many counters in each group? _____
----------------------	----------------------	----------------------	---

3 How can you make the groups equal?

--	--

---

---

---


---

# Make equal groups



1 Tick (✓) the sentence that describes the groups below.


a



a) There are 3 equal groups with 12 in each group.

b) There are 12 equal groups with 3 in each group.

b



a) There are 5 equal groups with 3 in each group.

b) There are 3 equal groups with 5 in each group.

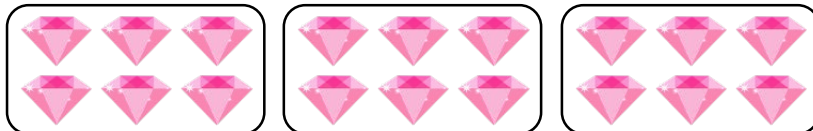
c



a) There are 4 equal groups with 3 in each group.

b) There are 3 equal groups with 4 in each group.

d



a) There are 3 equal groups with 6 in each group.

b) There are 6 equal groups with 3 in each group.

# Make equal groups



1 The group below is equal. True or false? Explain how you know.

			_____
			_____
			_____
			_____

2 How can you make the groups equal?

		_____
		_____
		_____
		_____

3 In the space provided, write down the matching equal groups.

Three 10s		
Two 5s		
Three 3s		