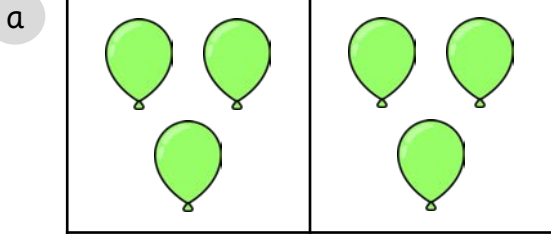


Multiplication sentences from pictures



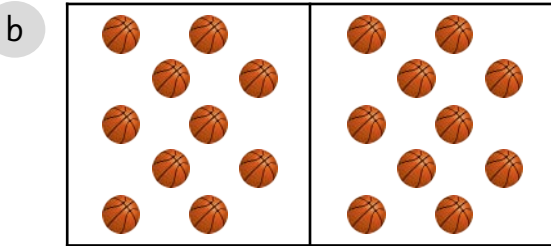
1 Complete:



_____ x _____ = 6

_____ lots of 3 = _____


_____ multiplied by _____ = 6



_____ x _____ = 20

_____ lots of 10 = _____

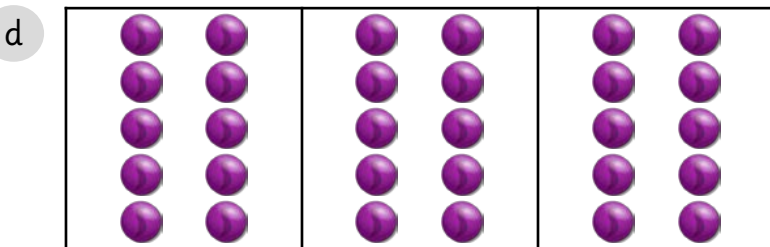
_____ multiplied by _____ = 20



_____ x _____ = 6

_____ lots of 2 = _____

_____ multiplied by _____ = 6




_____ x _____ = 30

_____ lots of 10 = _____

_____ multiplied by _____ = 30

2 Draw groups to show 10 lots of 2:



Multiplication sentences from pictures





1 Use $<$, $>$ or $=$ to make the picture statements correct.

a



b



c



5 lots of 2

2 Complete the table below.

Picture	Multiplication	Sentence
	2×10	____ lots of ____ is equal to 20.
	____ x ____	____ lots of ____ is equal to 16.

3 Two lots of seven is equal to $7 + 2$.

True

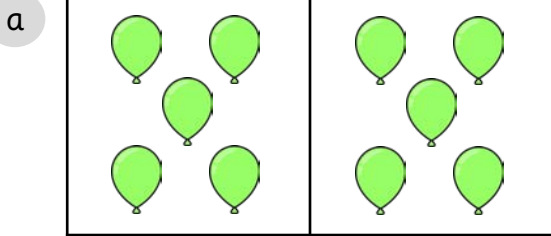
Explain your answer.

False

Multiplication sentences from pictures



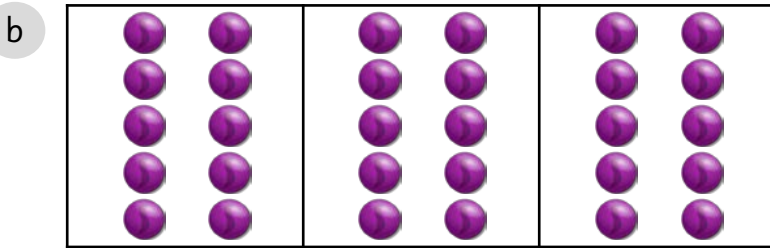
1 Complete:



_____ x _____ = 10

_____ lots of 5 = _____


_____ multiplied by _____ = 10



_____ x _____ = 30

_____ lots of 10 = _____

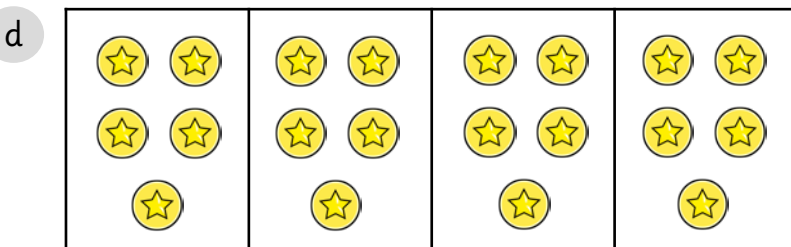
_____ multiplied by _____ = 30



_____ x _____ = 6

_____ lots of 2 = _____

_____ multiplied by _____ = 6



_____ x _____ = 20

_____ lots of 5 = _____

_____ multiplied by _____ = 20

2 Use <, > or = to make the picture statements correct.

a




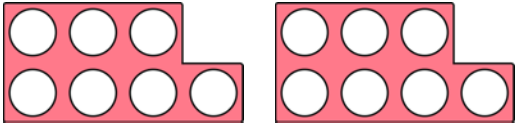
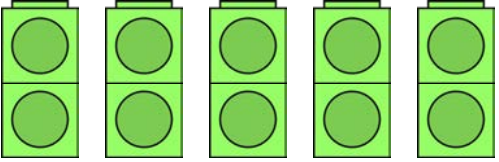

b



Multiplication sentences from pictures



1 Complete the table below.

Picture	Multiplication	Sentence
	$3 \times \underline{\quad}$	<p>_____ lots of _____ is equal to 30.</p>
	$\underline{\quad} \times \underline{\quad}$	<p>_____ lots of _____ is equal to 14.</p>
	$\underline{\quad} \times \underline{\quad}$	<p>_____ lots of _____ is equal to 10.</p>
	$\underline{\quad} \times \underline{\quad}$	<p>_____ lots of _____ is equal to 15.</p>

2 There are 5 apples in each fruit bowl. There are 3 bowls.
How many apples are there altogether? Complete the calculation to show this.

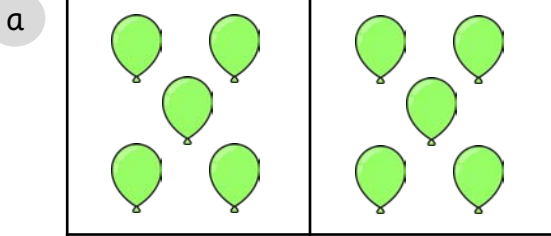
$$\underline{\quad} \times \underline{\quad} = \underline{\quad}$$

Draw a picture to represent this.

Multiplication sentences from pictures




1 Complete:



_____ x _____ = 10

_____ lots of 5 = _____

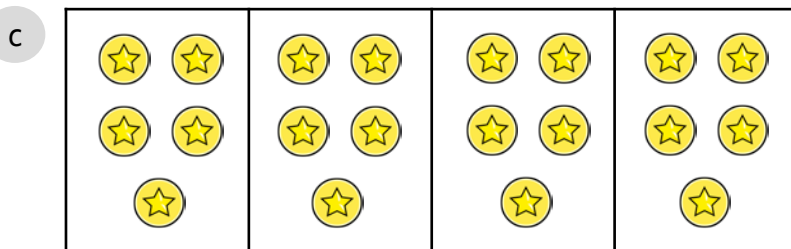
_____ multiplied by _____ = 10



_____ x _____ = 30

_____ lots of 10 = _____

_____ multiplied by _____ = 30



_____ x _____ = 20

_____ lots of 5 = _____

_____ multiplied by _____ = 20

2 Use <, > or = to make the picture statement correct.



3 lots of 3


3 Complete:

a



= 3 x _____

b



= 4 x _____

Multiplication sentences from pictures



1 Complete the table.

Picture	Multiplication	Sentence
	$4 \times \underline{\quad}$	<p>_____ lots of _____ is equal to 40.</p>
	$\underline{\quad} \times \underline{\quad}$	<p>_____ is equal to 21.</p>
	$\underline{\quad} \times \underline{\quad}$	<p>_____ is equal to 15.</p>
	$\underline{\quad} \times \underline{\quad}$	<p>_____ is equal to 27.</p>

2 There are 8 apples in each fruit bowl. There are 3 bowls.
How many apples are there altogether? Complete the calculation to show this.

$$\underline{\quad} \times \underline{\quad} = \underline{\quad}$$

Draw a picture to represent this.