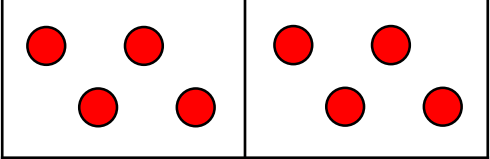


Multiplication symbol



1 Complete the sentences to describe the equal groups.

a

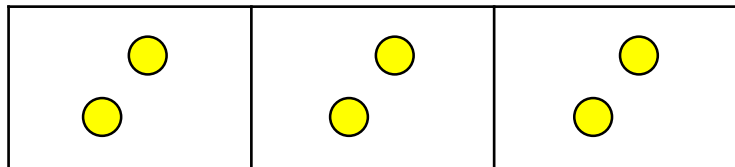


_____ + _____ = 8
_____ x _____ = 8

There are _____ equal groups with _____ in each group.

There are two _____s.

b

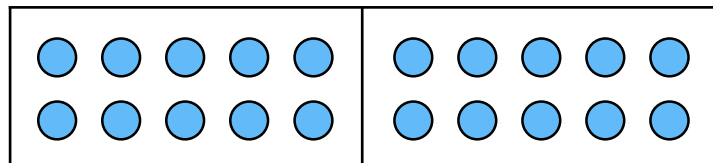


_____ + _____ + _____ = 6
_____ x _____ = 6

There are _____ equal groups with _____ in each group.

There are three _____s.

c

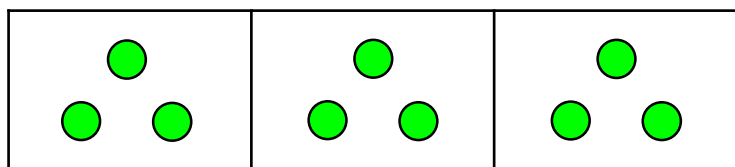


_____ + _____ = 20
_____ x _____ = 20

There are _____ equal groups with _____ in each group.

There are two _____s.

d



_____ + _____ + _____ = 9
_____ x _____ = 9

There are _____ equal groups with _____ in each group.

There are three _____s.

Multiplication symbol




- 1 Complete the table below. The first one has been completed for you.

Addition	Multiplication
$3 + 3$	2×3
	4×2
	5×10
$10 + 10 + 10$	
$2 + 2 + 2 + 2 + 2 + 2$	

- 2 Complete the story for the multiplication: 10×2 .

There are _____ pots. There are _____ pencils in each pot.

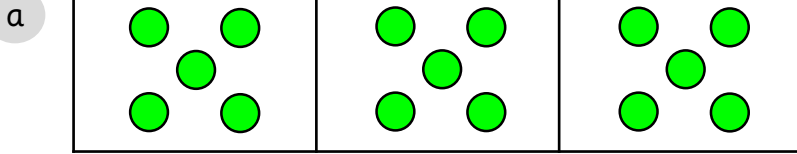
Complete the picture to show the story.



Multiplication symbol



1 Complete the sentences to describe the equal groups.

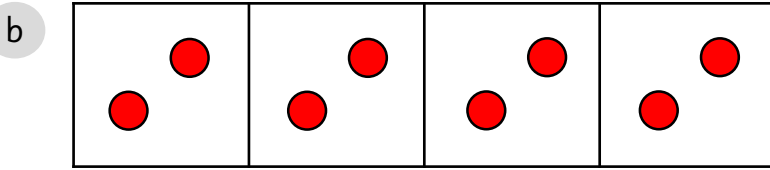


$$\underline{\quad} + \underline{\quad} + \underline{\quad} = 15$$

$$\underline{\quad} \times \underline{\quad} = 15$$

There are _____ equal groups with _____ in each group.

There are three _____s.

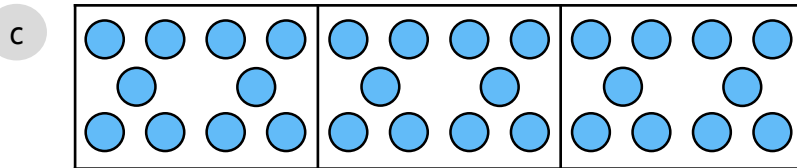


$$\underline{\quad} + \underline{\quad} + \underline{\quad} + \underline{\quad} = 8$$

$$\underline{\quad} \times \underline{\quad} = 8$$

There are _____ equal groups with _____ in each group.

There are four _____s.



$$\underline{\quad} + \underline{\quad} + \underline{\quad} = 30$$

$$\underline{\quad} \times \underline{\quad} = 30$$

There are _____ equal groups with _____ in each group.

There are three _____s.

2 Complete the table below.

Addition	Multiplication
$5 + 5 + 5 + 5$	
	3×2
$10 + 10 + 10 + 10 + 10$	
	6×5

Multiplication symbol



1 Complete the table below.

Story	Draw it	Addition	Multiplication
There are four equal groups with 2 in each group.			
There are three equal groups with 5 in each group.			

2 Complete the story for the multiplication: 7×5 .

There are _____ pots. There are _____ pencils in each pot.

3 Tam says,



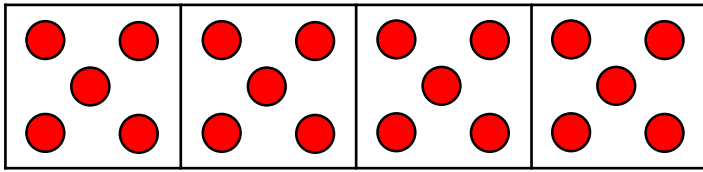
$$5 + 5 + 5 + 5 + 5 = 5 \times 5$$

Is Tam correct? Explain how you know.

Multiplication symbol



1 Complete the sentences to describe the equal groups.



$$\underline{\quad} + \underline{\quad} + \underline{\quad} + \underline{\quad} = 20$$

$$\underline{\quad} \times \underline{\quad} = 20$$

There are _____ equal groups with _____ in each group.

There are four _____s.

2 Complete the table below.

Addition	Multiplication
$5 + 5 + 5$	
	6×2
$3 + 3 + 3 + 3 + 3 + 3 + 3$	
	4×10

3 Complete the table below.

Story	Draw it	Addition	Multiplication
There are five equal groups with 3 in each group.			
There are four equal groups with 5 in each group.			

Multiplication symbol



1 Use $<$, $>$ or $=$ to make the statements correct.

a 4×3 $3 + 3 + 3 + 3$

b 5×5 $5 + 5 + 5$

c 5×4 $4 + 4 + 4 + 4$

d 3×2 $3 + 3 + 3$

2 Complete the statement below to make it correct.

$$3 + 3 + 3 + 3 > \underline{\quad} \times \underline{\quad}$$

3 The total is 20, what could the addition and multiplication number sentences be?
List your answers below.

Addition:

Multiplication:

4 Complete the story for the multiplication: 4×5 .
Draw a picture to show this.
