


# Intervals of 5: Past


Draw the times on the clocks.



10 past 7




20 past 12



5 past 9



5 past 8




25 past 11



20 past 6




10 past 3




25 past 2



10 past 5



5 past 4



25 past 1



20 past 10

# Intervals of 5: To

Draw the times on the clocks.




20 to 4



5 to 7




10 to 2




5 to 12



25 to 5



20 to 10




20 to 6




10 to 11



25 to 1



10 to 8



25 to 3



5 to 9

# Challenge cards



Problem solving and reasoning cards:



Kat starts her Maths paper at 10 past 7.  
Each question takes 5 minutes to complete.  
She completes 5 questions.

What time does Kat finish her questions?  
Explain how you know.

Colour the correct time shown.



20 past 1

10 past 8

20 to 2

Mo says,



If the time is 5 to 4. The minute hand would be on the 5.

Do you agree with Mo?

Explain why.

The bus leaves at 10 past and 20 to every hour.



Which buses can Asha get if she catches the bus between the times shown above?

Match the clocks to the correct time.



Ten to 2



Ten past 2



Ten past 10



The time shown is 20 past 10.

What mistake do you think Ben has made?